

* اهم المصطلحات التي تم دراستها في المصنف الاول

Days of the week:

ايام الاسبوع

Saturday

Sunday

Monday

Tuesday

Wednesday

Thursday

Friday

يوجد 7 ايام في الاسبوع

There are 7 days a week

1 week = 7 days

Months of the year:

شهور السنة

January

February

March

April

May

June

July

August

September

October

November

December

يوجد 12 شهر في السنة

There are 12 months a year

1 year = 12 months

Hanaa Haroon
مع من شاء هارون

Adding	الجمع
Subtracting	الطرح
minus	ناقص -
plus	زائد +
equal	يساوي =
greater than = more than	أكثر من
smaller than = less than	أقل من
ones	آحاد
Tens	عشرات
ascending order	ترتيب تصاعدي
descending order	ترتيب تنازلي
Value	قيمة رقمية / عددية
place value	قيمة مكانية
clock	ساعة
time	وقت
Day = 24 hours	يوم = 24 ساعة
1 hour = 60 minutes	ساعة = 60 دقيقة
pound = L.E.	جنيه
Complete	أكمل
Count	عد
Draw	ارسم
Join = Match	وصل
Arrange	رتب

Hanaa Haroon ❤️
مع مس صناء هارون

Ordinal numbers

الأعداد الترتيبية

First	= 1 st	الأول
Second	= 2 nd	الثاني
third	= 3 rd	الثالث
fourth	= 4 th	الرابع
Fifth	= 5 th	الخامس
Sixth	= 6 th	السادس
Seventh	= 7 th	السابع
eightth	= 8 th	الثامن
ninth	= 9 th	التاسع
tenth	= 10 th	العاشر

Shapes :

الاشكال :

triangle	مثلث
Square	مربع
rectangle	مستطيل
Circle	دائرة

Hanaa Haroon
مع حب من هانا هارون

Solids :

المجسمات

Cube	مكعب
Cuboid	متوازي مستطيلات
pyramid	شكل هرمي
Cone	مخروط
Cylinder	اسطوانة
Sphere	كرة

Fractions :

الأسور :

one whole = 1	واحد كامل
half = $\frac{1}{2}$	نصف
quarter = $\frac{1}{4}$	ربع
three quarters = three fourths = $\frac{3}{4}$	ثلاثة ارباع

Relative positions

الامواضع النسبية

inside = in	داخل
outside = out	خارج

down	اعلى
up	اسفل

above	فوق
below	تحت

behind	خلف
in front of	امام

on the right	على اليمين
on the left	على اليسار
between	بين

Hanaa Haroon
مع حب صفاة هارون

Fractions :

الأسور :

one whole = 1	واحد كامل
half = $\frac{1}{2}$	نصف
quarter = $\frac{1}{4}$	ربع
three quarters = three fourths = $\frac{3}{4}$	ثلاثة ارباع

Relative positions

الأوضاع النسبية

inside = in	داخل
outside = out	خارج

down	أعلى
up	أسفل

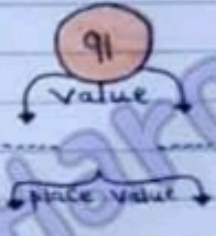
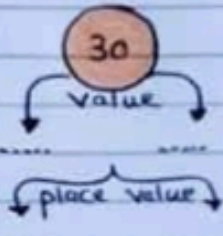
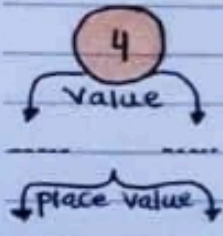
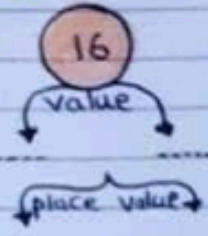
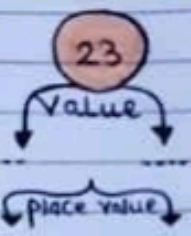
above	فوق
below	تحت

behind	خلف
in front of	امام

on the right	على اليمين
on the left	على اليسار
between	بين

Hanaa Haroon
مع حب صناء هارون

Write the value and the place value :



Number	place value	value
25	Ones	5
42
66
15
4
30
47
35
21
10
59
9

Hanaa Halween

6

Arrange in a descending order:

75, 35, 85 and 45
---, ---, --- and ---

36, 76, 46 and 96
---, ---, --- and ---

58, 10, 29 and 28
---, ---, --- and ---

14, 24, 42, and 40
---, ---, --- and ---

Arrange in an ascending order:

30, 71, 65 and 19
---, ---, --- and ---

94, 24, 92 and 22
---, ---, --- and ---

$10+30$, $50+10$, $40+30$ and $20+10$
-----, -----, ----- and -----

$30-10$, $50-10$, $40-30$ and $90-30$
-----, -----, ----- and -----

Hanad Haroon

Find the result:

$80 - 30 =$

$50 - 30 =$

$40 - 20 =$

$20 - 10 =$

$60 - 30 =$

$90 - 60 =$

$80 - 40 =$

$70 - 20 =$

$30 - 30 =$

$70 - 40 =$

put $>$, $<$ or $=$

$54 \quad \square \quad 61$

$84 \quad \square \quad 48$

$70 \quad \square \quad 72$

$37 \quad \square \quad 40$

$4 \text{ tens, } 2 \text{ ones} \quad \square \quad 2 \text{ ones, } 4 \text{ tens}$

$5 \text{ tens} \quad \square \quad 50$

$90 + 9 \quad \square \quad 80 + 9$

$3 \text{ tens} \quad \square \quad 3 \text{ ones}$

$40 - 20 \quad \square \quad 50 - 20$

$99 \quad \square \quad 9 \text{ tens}$

$6 \text{ ones} \quad \square \quad 5 \text{ ones}$

$\text{Sixty} \quad \square \quad \text{Sixteen}$

$3 \text{ tens} \quad \square \quad 4 \text{ ones}$

$37 \quad \square \quad \text{thirty one}$

$8 + 80 \quad \square \quad 80 + 7$

$50 + 2 \quad \square \quad 20 + 5$

$30 - 10 \quad \square \quad 40 - 20$

Hanaa Hatoon

Lesson

Numbers 1, 2, 3, 4 and 5

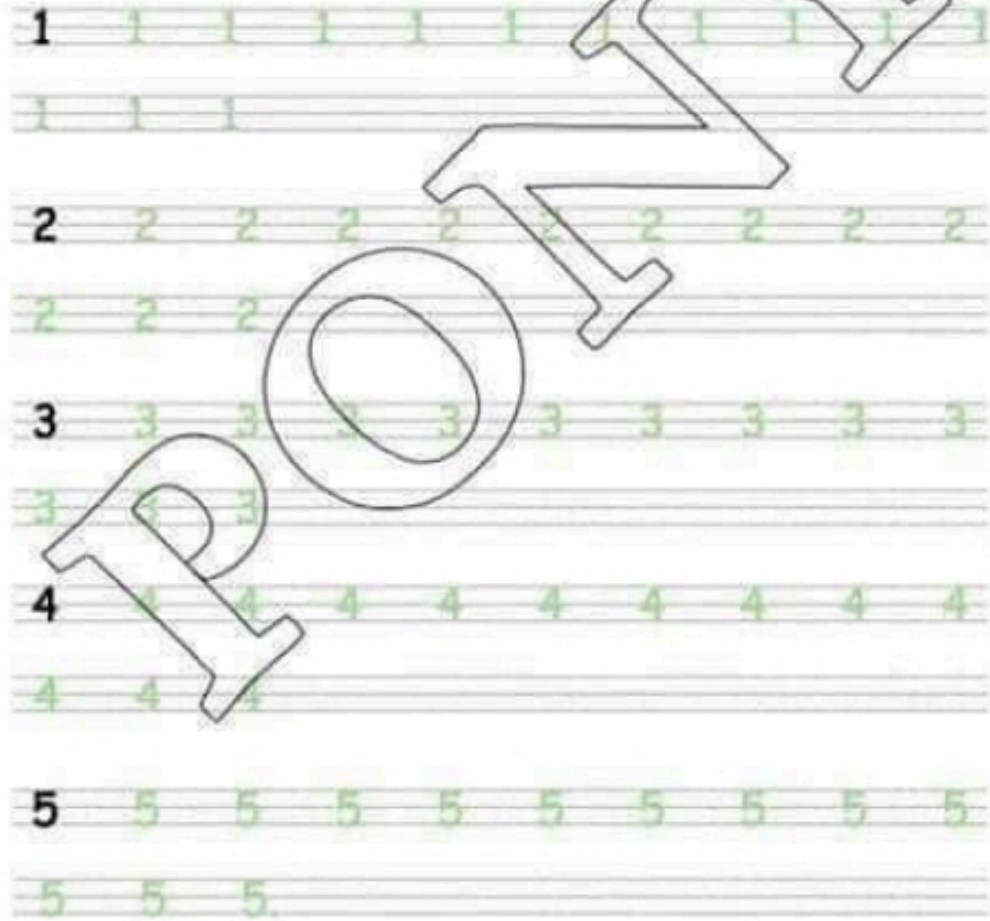
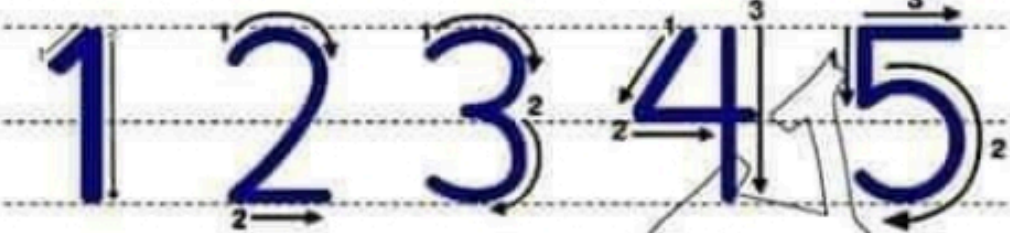
One

Two

Three

Four

Five



PONY

Maths

For The Primary Stage



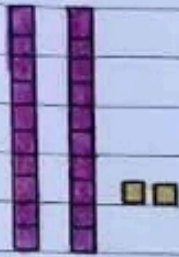
1st.

Primary
Lessons

First term 2019

Chapter 2

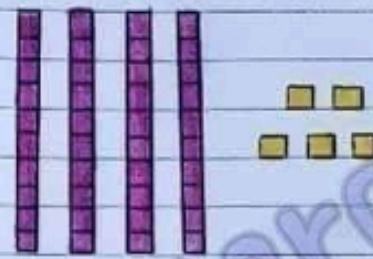
Tens and ones: العشرات والآحاد



$$2 \text{ tens} + 2 \text{ ones}$$

$$20 + 2$$

$$= 22$$



$$4 \text{ tens} + 5 \text{ ones}$$

$$40 + 5$$

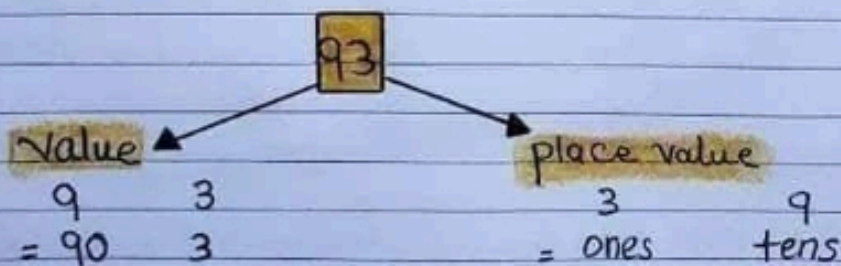
$$= 45$$

$$57 = 50 + 7$$

$$= 5 \text{ tens} + 7 \text{ ones}$$

Hanaa Haroon

value and place value القيمة الرقمية والمكانية



Complete :

- 7 tens =
- thirty four =
- 3 ones =
- 3 tens =
- forty three =
- 4 tens + 8 ones = 48
- tens + ones = 73
- ones + tens = 65
- ones + tens = 42
- tens + ones = 26
- tens + ones = 54
- tens + ones = 70
- ones + tens = 55
- 4 tens + 4 ones =
- 2 tens + 6 ones =
- 9 ones + 9 tens =
- 3 ones + 1 ten =
- 9 ones + 8 tens =
- 3 tens + 6 tens =
- 47 = 40 + 7
- 63 = +
- 82 = +
- 59 = +
- 31 = +
- 90 = +
- 85 = +
- 30 = +



Mrs. Hanaa Haroon

Comparing two numbers مقارنة عددين

greater than >

less than <

equal to =

* عند مقارنة رقمين

① نقارن tens digits

② نقارن ones digits

Ex:

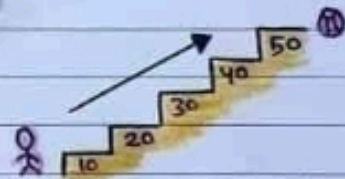
$$\underline{5}3 > 4\underline{1}$$

$$\underline{5}3 < 5\underline{7}$$

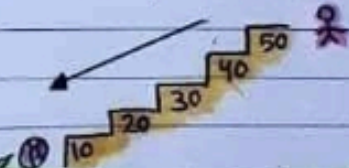
Hanaa Haroon

Ordering numbers ترتيب الأعداد

Ascending order: الترتيب التصاعدي من الأصغر إلى الأكبر
From the least to the greatest.




descending order: الترتيب التنازلي من الأكبر إلى الأصغر
From the greatest to the least.



Subtracting multiples of 10 طرح مضاعفات الرقم 10

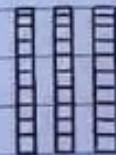
$$50 - 10 = 40$$

$$5 - 1 = 4$$



$$30 - 20 = 10$$

$$3 - 2 = 1$$



Comparing two numbers مقارنة عددين

greater than >

less than <

equal to =

* عند مقارنة رقمين

① نقارن tens digits

② نقارن ones digits

Ex:

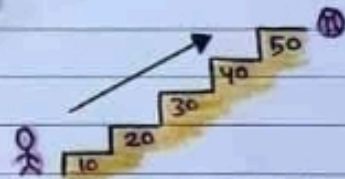
$$\underline{5}3 > 4\underline{1}$$

$$\underline{5}3 < 5\underline{7}$$

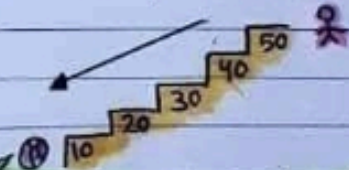
Hanaa Haroon

Ordering numbers ترتيب الأعداد

Ascending order: الترتيب التصاعدي من الأصغر إلى الأكبر
From the least to the greatest.




descending order: الترتيب التنازلي من الأكبر إلى الأصغر
From the greatest to the least.



Subtracting multiples of 10 طرح مضاعفات الرقم 10

$$50 - 10 = 40$$

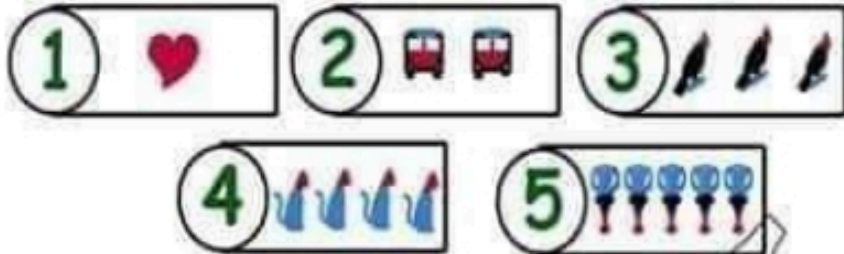
$$5 - 1 = 4$$



$$30 - 20 = 10$$

$$3 - 2 = 1$$






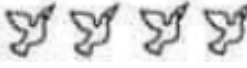


Match



Circle the correct answer :

		
1 2 3	4 5 1	Three Four five




Write the number :

		
.....

Draw ● in the square according to the number below :

Four 	Three 	Two

Colour according to the number :

		
One 2	Three

Six **Seven** **Eight** **Nine**

Match 6 9 7 8

Circle the correct answer :

5	6	7

8	9	6

Five	Six	seven

Write the number :

.....

.....

.....

Draw ● in the square according to the number below :

Six

.....	9

Seven

Colour according to the number :

Six

.....	7

Eight

Circle the correct answer :

5	6	7

8	9	6

Five	Six	seven

Write the number :

.....

.....

.....

Draw ● in the square according to the number below :

Six

.....	9

Seven

Colour according to the number :


Six

.....	7


Eight

Lesson 3


Numbers 0 and 10




zero 0




one 1



two 2




three 3



four 4



five 5



six 6




seven 7



eight 8




nine 9



ten 10

Match



4

two

0

four

2

zero

8

seven

7

six

6

eight

3

one

1

three

9

ten

10

five

5

nine

Circle the correct answer :



(0 - 1 - 2)



(1 - 2 - 3)



(3 - 4 - 5)



(4 - 5 - 6)



(6 - 10 - 8)



(8 - 9 - 10)



(zero - one - two)


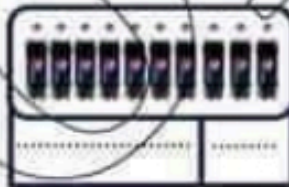


(three - four - six)



(six - seven - eight)

Write the number :



Lesson 4 Numbers 11, 12, 13, 14 and 15

Match

Lesson 4 Numbers 11, 12, 13, 14 and 15

Match

	11	fourteen
	14	eleven
	12	fifteen
	15	thirteen
	13	twelve

Write the Number :



--	--



--	--



--	--



--	--



--	--



--	--

Circle the correct answer :



[13 - 14 - 15]

[thirteen - fourteen - fifteen]



[10 - 12 - 14]

[twelve - thirteen - fourteen]



[10 - 11 - 12]

[ten - eleven - twelve]